

ANAND PUBLIC SCHOOL

HOLIDAYS HOMEWORK

CLASS - VIII

ENGLISH

Revise PT-4 Syllabus

Literature: Chapter – 12, 13

Language: Chapter – 15, 16, 20 & 22 + Poster Making

Do Practice of Creative's:

- A world without mobile
- Importance of E-books
- An unexpected surprise

Do given worksheets

Learn Dictation Words for Final Term

Worksheets

1) Complete the sentences with appropriate Prepositions:

[1 × 15 = 15]

1. Government departments are accountable _____ their spending.
2. He is very active _____ the scouting movement.
3. She is very adaptable _____ change.
4. He is very adept _____ making people feel at ease.
5. We are afraid _____ making him angry.
6. She is anxious _____ something happening to her children.
7. The rule of not allowing sandals to be worn to school is applicable _____ both teacher and pupils.
8. They were appreciative _____ what we had done for them.
9. Her dress was appropriate _____ the occasion.
10. He is not ashamed _____ the bad things he has done.
11. The headmaster is aware _____ what is going on.
12. Application forms are available _____ anyone who wants to sit in the examination.
13. They are bad _____ English.
14. Sacrifice and hard work are essential _____ success.
15. Playing games is beneficial _____ health.



2) Rearrange the following words and phrases to make meaningful sentences:

1. the/body/sleep is/essential/a good night's/for [1 × 12 = 12]
2. to/catch/people/get/sleep/cold/7 hours/who less than/of/are/likely
3. loss of/may also/appetite/they/experience
4. sleep deeply/comfortable/hence to/clothes/relax/and/wear/one must
5. beaches/shell/a/sandy/variety/provide/of
6. great/each/has/many/continent/rivers
7. this/is/bright/generation/one/a/young
8. two/a/mirrors/contains/periscope
9. agriculture/India's/depends on/economy mainly
10. positions/two/opening/of/batsmen/took
11. all alone/were/i/many/was/they/and
12. a horrible/sight/what/saw/was/I



3) Identify the conjunction:

1. I met her while I was going to the market.
2. He is happy though he is poor.
3. He may do whatever he likes.
4. The teacher told him to work hard else he will fail.
5. Be honest and kind.
6. I waited till the train arrived.
7. Tom runs faster than Harry.
8. We came after they had left.
9. I shall go whether your come or not.
10. The dog ran after the cat.

4) Join the following sentences with a suitable conjunction:

1. He is rich man. He is very humble.
2. She did not work hard. She failed.
3. Our car was damaged. We escaped unhurt.
4. He was guilty. He was not punished.
5. Be quick. You will miss the train.
6. He sells mangoes. He sells oranges.



- 
- 
7. I honour him. He is a brave man.
 8. He is poor. He is honest.
 9. He sat down. He was tired.
 10. Mohan works hard. Abdul works harder.

5) Complete the sentences in reported speech. Note the change of pronouns and tenses.

1. "Where is my umbrella"? she asked.
She asked _____
2. "How are you"? Martin asked us.
Martin asked us _____
3. He asked, "Do I have to do it"?
He asked _____
4. "Where have you been"? the mother asked her daughter.
The mother asked her daughter _____
5. "Which dress do you like best"? she asked her boyfriend.
She asked her boyfriend _____
6. "What are they doing"? she asked
She wanted to know _____
7. "Are you going to the cinema"? he asked me.
He wanted to know _____
8. The teacher asked, "Who speaks English"?
The teacher wanted to know _____
9. "How do you know that"? she asked me.
She asked me _____
10. "Has Caron talked Kelvin"? my friend asked me.
My friend asked me _____
11. "What's the time"? he asked
He wanted to know _____



12. "When will we meet again"? she asked me.
She asked me _____
13. "Are you crazy"? she asked him.
She asked him _____
14. "Where did they live"? he asked.
He wanted to know _____
15. "Will you be at the party"? he asked her.
He asked her _____
16. "Can you meet me at the station"? she asked me.
She asked me _____
17. "Who knows the answer"? the teacher asked.
The teacher wanted to know _____
18. "Why don't you help me"? she asked him.
She wanted to know _____
19. "Did you see that car"? he asked me.
He asked me _____
20. "Have you tidied up your room"? the mother asked the twins.
The mother asked the twins _____

HINDI

PT-4 (January) पाठ्यक्रमयादकरो ।

साहित्य: पाठ-14, 17, 18

व्याकरण: पाठ-13, 14, 15

विलोम शब्द (61-90), पर्यायवाची (51-66), वाक्यांश (51-72),
अनेकार्थी (21-50), भिन्नार्थक (26-57)

गतिविधि: मौखिक कविता (पाठ-20), याद करो (12 पंक्तियाँ),
श्रुतलेख शब्द (पाठ-11 से 19 तक) का अभ्यास करो

सृजनलेख: 1) जब आपने अपना जन्मदिन वृद्धाश्रम में मनाया ।
2) सर्दियों में बर्फबारी का आनंद ।



MATHS

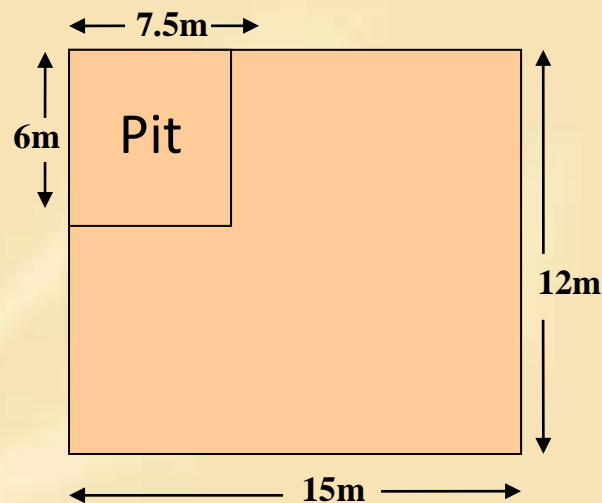
Holidays Homework of Maths (Assignment)

Do this Assignment in Holidays Homework Notebook:

1. A rectangular plot is 200sq. meters in area. If its length is 20m. Find its breadth and perimeter.
2. A grassy lawn, measuring 45m by 35m has been surrounded externally by 3m wide path. Calculate the cost of gravelling the path at the rate of Rs. 6.50 per. Sq.m.
3. The area of the floor of a rectangular hall of length 24m is 480m^2 . Carpets of size $6\text{m}\times 2\text{m}$ are available. How many carpets are required to cover the floor of the rectangular hall?
4. Find the area of trapezium, whose parallel sides are 53cm and 43cm and the perpendicular distance between them is 24cm.
5. The area of a trapezium is 180cm^2 and its height is 9cm. If one of the //sides is longer than the other by 6cm. Find the two //sides.
6. Find the area of //gm with base 12cm and altitude 8.2cm.
7. The area of a rhombus is 320cm^2 and one of the diagonals is 16cm. Find the length of another diagonal.
8. In a quadrilateral ABCD, $AB=28\text{cm}$, $BC=26\text{cm}$, $CD=50\text{cm}$ and $DA=40\text{cm}$ and diagonal $AC=30\text{cm}$. Find the area of quadrilateral.
9. Find the each edge of a cube whose total surface area is 486cm^2 .
10. Find the surface area of cube whose edge is 17cm.
11. Find the surface area of cuboid 15m long 13m wide and 10m high.
12. Find the height of a cylinder whose radius is 7cm and total surface area is 968cm^2 .
13. Curved surface area of a cylinder is 4.4m^2 . If the radius of the base of the cylinder is 0.7cm. Find its height.



14. The internal measures of a cuboidal room are $12\text{m} \times 8\text{m} \times 4\text{m}$. Find the total cost of painting all four walls of room. If the cost of painting is Rs. 50 per m^2 .
15. Find the volume of cuboidal box whose length is 15cm, breadth is 12cm and height is 5cm.
16. Find the height of a cuboid whose volume is 275cm^3 and area of the base is 25cm^2 .
17. A room is in the form of a cuboid of measures $60\text{m} \times 40\text{m} \times 30\text{m}$. How many cuboidal boxes can be stored in it if the volume of one cuboidal box is 5m^3 ?
18. Find the volume of right circular cylinder if the radius of base is 14cm and height is 15cm.
19. The radius and height of a cylinder is in the ratio 5:7 and its volume is 550cm^3 . Find its radius.
20. The dimensions of a field are 15m by 12m. A pit 7.5m long, 6m wide and 1.5m deep is dug at one corner of the field. The earth removed is evenly spread over the remaining area of the field. Calculate the rise in the level of the field.



Activity:

Draw the following net patterns in your Notebook and also colour them.

- i) Net pattern for Cuboid
- ii) Net pattern for Cube
- iii) Net pattern for Cylinder
- iv) Net pattern for Cone
- v) Net pattern for Triangular Prism
- vi) Net pattern for Square Pyramid
- vii) Net pattern for Hexagonal Pyramid

Note: Assignment of Maths – 7 Marks
Activity of Maths – 3 Marks
– 10 Marks

SCIENCE

Q1. Write down the following Activities in Science Practical file with diagram:

- i. Activity – 2 and Activity – 3 of Page No. 213(Chapter-10)**
- ii. Activity – 4 of Page No. 238(Chapter-11)**
- iii. Activity – 5 of Page No. 239(Chapter-11)**
- iv. Activity – 1 of Page No. 256(Chapter-12)**
- v. Activity – 2 of Page No. 257(Chapter-12)**
- vi. Activity – 1 of Page No. 277(Chapter-13)**
- vii. Activity – 2 of Page No. 278(Chapter-13)**

Q2. Do Practice and draw the following diagram in science practical file:

- i. Location of endocrine glands in the Human Body: (Chapter-7)**
- ii. Life cycle of Frog and Mosquito: (Chapter-7)**
- iii. Structure of the Human Ear: (Chapter-10)**



iv. Gold leaf electroscope: (Chapter-12)

v. Reflection from smooth and rough surface: (Chapter-13)

vi. Structure of Human Eye: (Chapter-13)

Q3. Do practice of Assertion – Reason given on Chapter-7, 10, 11, 12 & 13

Q4. Make three Case Study from Chapter-11, 12 & Chapter-13 Each. (One Case Study from one chapter) and then solve that.

Q5. Revise the Syllabus of PT-4. (Chapter-11 & Chapter-12)

SOCIAL SCIENCE

Learn all the Chapter of PT-4

PT-4 Syllabus: Chapter-9 (History), Chapter-18 (Geography), Chapter-24 (Civics)

Do all Maps and paste in your Social Science Note Book.

Activity on struggle for Indian Freedom – 1919-1947 (In your Social Science Note Book)

1) Satyagraha Movement

2) Non-Cooperation Movement

3) Civil-Disobedience Movement

Do Sample Paper of full Syllabus

(Solve in your fair Notebook) Marks: 80

➤ **One mark Questions:**

[1 × 20 = 20]

1. Who presides over the Supreme Court?

2. Which state has Common High Court?

3. The Chief Justice of the Supreme Court is appointed by Prime Minister. (√/×)

4. An act banning the practice of carrying manual scavenging was passed in _____.

5. Define Scheduled Caste.



6. What percent of Indians population is engaged in agriculture?
7. The Chairman of Planning Commission is _____.
 a) President b) Prime Minister c) Governer
8. Who played the key rule in signing of Lucknow Pact.
9. Sanskrit college at Banaras was established by:
 a) Vidyasagar b) Vivekanad c) Jonathan Duncan
10. When was santiniketan set up and by whom?
11. The _____ introduced the Caste System based on varna.
12. Who formed the Gadar Party?
 a) Ras Bihari Bose b) Aurobindu Ghosh c) Harindra Nath d) Lala Hardyal
13. The Rowlatt act was passed in _____.
14. When was the Industrial disaster occured in Bengal?
15. Shifting cultivation is also known as _____.
16. Which city is known as “The Manchester of India”?
17. Question based on Assertion & Reason
Assertion:All citizen of India have a right to justice through court?
Reason: Access to court is difficult for a wast majority of the poor in India.
18. **Assertion:**Kerala is the most Literate state in India.
Reason: Kerala has better education facilities.
19. **Assertion:**Adivasi are knows marginalised in India.
Reason: They follow a different, culture, language, traditions from main stream.
20. Who passed Morely Minto reforms?

➤ **Two marks Questions:**

[2 × 4 = 8]

21. What are the qualification of the Chief Justice and other Judges of the Supreme Court?
22. What do you understand by orient lists and Anglicists?
23. Who were Lal-Bal-Pal?
24. What is the importance of Human Resources?



➤ **Three marks Questions:**

[3 × 5 = 15]

25. Describe the cotton textile industry in Osaka. Write three points.
26. What are the Geographical factors for uneven distribution of Population? (Write in three points)
27. Who was Jyotiba Phule? What was his contribution in the field of Caste Reforms?
28. Why was the Cabinet Mission called so? Who were its members?
29. Define PMRY and SJSRY. Define IRDP.

➤ **Five marks Questions: (Do any Five)**

[5 × 5 = 25]

30. What is untouchability? Mention its different forms?
31. Describe the contribution of Mahatma Gandhi in India's struggle for Freedom.
32. What was the Conditions of education in India in the Pre-British era?
33. What are the Geographical factors for uneven distribution of population?
34. Manufacturing Industries are important for economic development of the country. Discuss.
35. Explain Surat Spilit.

➤ **Map Based Questions:**

[1 × 4 = 4]

36. I) Area having the population 100-150 million.
II) Area having the population 150-200 million.
III) Two region of Cotton Textile Industries.
IV) Two region of Iron and Steel Plant.

➤ **Case-Study – Read the Case Study and Answer the Questions:** [4 × 2 = 8]

37. (A) Chapter – 25 (Page No. 157)

Transport Sector – Transport Sector - - - - - 46119 coaches in the country.

- I) Which are the three life lines of India?
- II) What is the importance of Railways?
- III) Why transport Sector is called the lifeline of Indian Economy.
- IV) How many railway coaches in Rail Transport?



37. (B) Chapter – 11 (Page No. 64) (Lucknow Pact)

- I) When was First World War started?
- II) Write the main aim of Muslim league.
- III) What is the symbol of Hindu – Muslim unity?
- IV) What is Lucknow Pact?

PUNJABI

- ਪਾਠ-10 ਤੋਂ 17 (with Book Exercise)
- ਪੈਰਾਰਚਨਾ, ਗੁਰੂਨਾਨਕਦੇਵਜੀ, ਵਿਗਿਆਨਦੇਲਾਭ
- ਪੱਤਰ, ਬਿਨੈ-ਪੱਤਰ

SANSKRIT

- **पाठ्य पुस्तक:** पाठ-7, 8 + शब्द रूप याद करो
- **गतिविधि:** 'गीता' के कोई चार श्लोक अर्थ सहित लिखो तथा कोई दो श्लोक (मौखिक) याद करो ।

COMPUTER

Term – II Syllabus:

Chapter – 32, 34, 35, 36, 37, 39, 40 + Rapid Fire Quiz: 41, 42, 44, 46, 47, 48, 54, 55.

Rapid Fire Quiz, Quiz-1, Quiz-2 + Current Affairs

Revise these Chapters for Term – II Exams.

DRAWING

- **Every Day Life:** Draw Scenes from daily life, like Market, Parks or Family gathering, station etc.

MORAL VALUE

- Learn Back Exercise of Chapter-8 to Chapter-13

